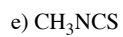
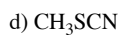
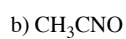


## Practice on Resonance Structures

1. For each of the following draw reasonable resonance structures.



2. Draw reasonable resonance structures for each of the following molecular structures.

